

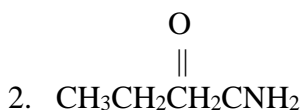
Naming Organic Compounds

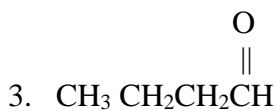
Amines, Esters, and Aldehydes



Name the molecules below:

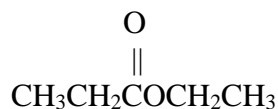






4. For the molecule below

- Circle the carbon chain which touches the single bonded oxygen.
- Box the other carbon chain which includes the carbon double bonded to an oxygen atom
- Name the molecule



Draw and **name** an isomer of the molecule in # 4 above. (Be careful to form an isomer for which you know the functional group and can name!)